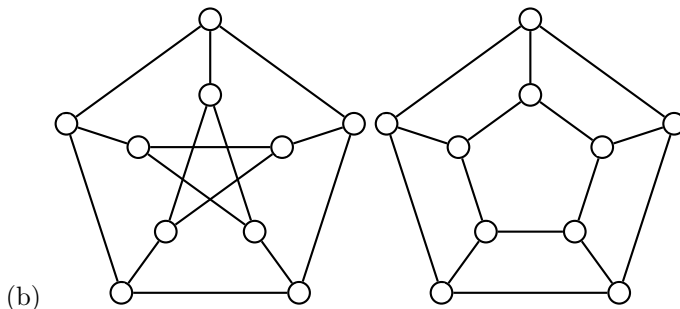
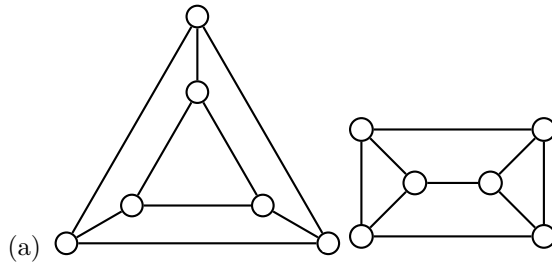
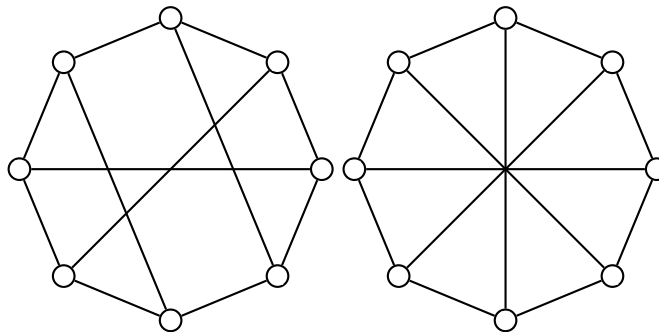


Graphs

- For the following pairs of graphs, determine whether or not they are isomorphic. You should now have the tools to do this formally.



(c) (Challenge)



- (Counting) How many isomorphisms are there between the two graphs in (a)?

- (1a) Yes
- (1b) No (One has a 4-cycle and the other doesn't).
- (1c) Yes
- (2) 12